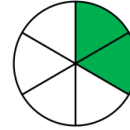
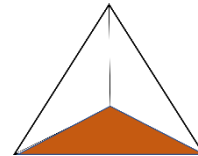
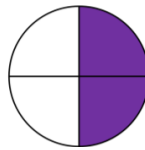


Aufgabe 1: Welche Abbildungen zeigen die gesuchten Brüche? Kreise ein.


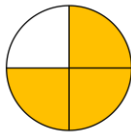
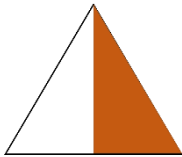
a)  $\frac{1}{3}$



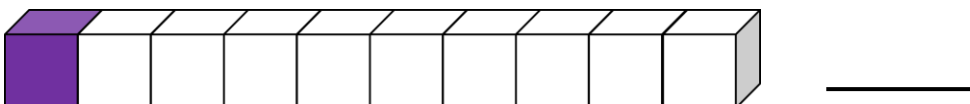
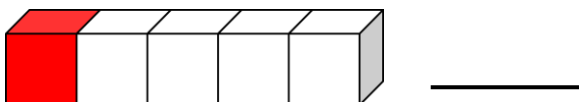
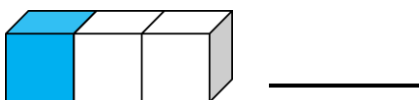
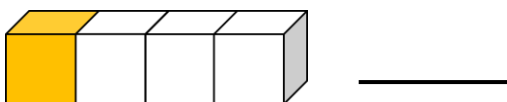
b)  $\frac{1}{4}$



c)  $\frac{1}{2}$



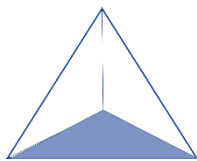
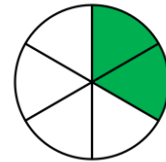
Aufgabe 2: Welcher Bruchanteil ist bunt? Schreibe den Bruch auf die Linie.



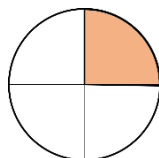
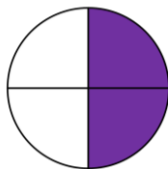

Aufgabe 3: Was passt zusammen? Verbinde.



$$\frac{1}{3}$$



$$\frac{1}{4}$$



$$\frac{1}{2}$$

